
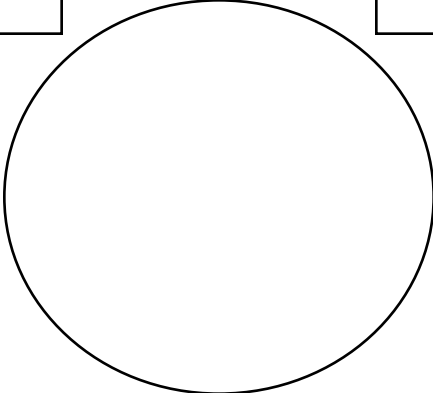


Eli and the Magic Peanuts

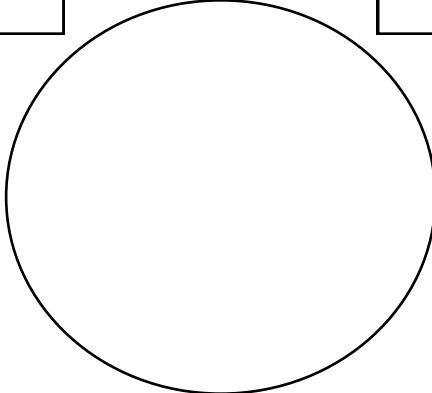


DIRECTIONS: Use two-colored counters and an Ely mat to solve the following problems. Draw pictures to show your solution.

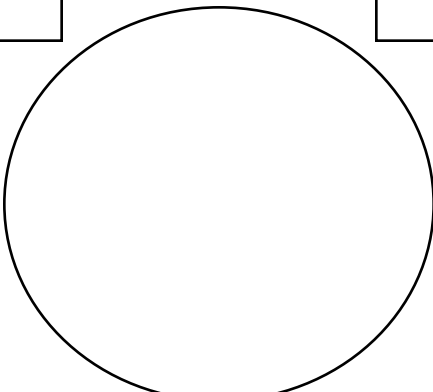
1. Ely picked up 3 magic peanuts and 5 regular peanuts. How many peanuts were left in the bag when he decided to snack?

Magic Peanuts	Eli & The Magic Peanuts	Regular Peanuts
		

2. Ely picked up 4 magic peanuts and 4 regular peanuts. How many peanuts were left in the bag when he decided to snack?

Magic Peanuts	Eli & The Magic Peanuts	Regular Peanuts
		

3. Ely picked up 7 peanuts. There were only 5 peanuts left in the bag when Ely decided to have a snack. How many magic peanuts did Ely pick up that day?

Magic Peanuts	Eli & The Magic Peanuts	Regular Peanuts
		

4. Ely picked up 9 peanuts. When he opened the bag, there were only 3 peanuts left in the bag. How many magic peanuts did Ely pick up that day?

Magic Peanuts	Eli & The Magic Peanuts	Regular Peanuts
	