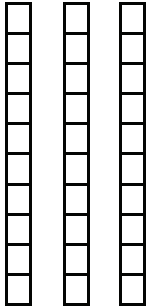



Name:


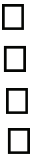
Date:

Anna and Julia counted the beans in their bags. They used base ten blocks to show how many beans they each had in their bags.

Anna's Bag

Tens	Ones
	

Julia's Bag

Tens	Ones
	

- Who had the most beans in her bag? Explain how you know.

- How many more did she have? Show how you found this answer.